



Holiday Homework

Class!



SUMMER VACATION

Dear Parents,

- ❖ Long awaited Summer Holidays have commenced. It is a time to relax, rejuvenate, refresh and regain health. It is also a time to reduce stress & increase productivity.
- ❖ Spend quality time with your kids and inculcate values.
- ❖ Help and guide your ward in doing Holiday Homework.
- ❖ Encourage your ward to converse in English.
- ❖ Do some kind of physical exercises with your kids.
- ❖ Read the Newspaper every day and encourage your ward to do so.

BE HEALTHY, BE HAPPY

Regards
GTB-011-46575555

Guru Tegh Bahadur 3rd Centenary Public School
C- Block, Mansarovar Garden, New Delhi -15
Holiday Home Work 2022-23
Class I

English

1. Learn the poem 'Baby Beds'.
2. Reading and recitation test will be conducted in the first week of July.

Hindi

कविता : परांठा आलू का याद कर।
गुंजन पुस्तक के करवाए गए पाठ पढ़।
करवाई गए मात्राओं का अभ्यास करे।

Maths

1. Learn table of 2.
2. Practice all work done in the note book and book.

EVS

1. Read and revise all the lessons done in the note book.
2. Make a collage / poster on A4 size sheet on the following topic:
 - How to keep yourself clean, fit and Healthy (Roll No. 1-10)
 - My country 'My Pride' (Roll No. 11-20)
 - Reduce, Reuse, Recycle waste (Roll No. 21-30)
 - Cut out of any animal / bird / butterfly /flower (Roll No. 31-50)

Computer

1. Draw / print a picture of 'Computer Keyboard' on A4 size sheet and paste it in the computer copy.
2. Learn Lesson 1.

GK

Learn the questions in the given worksheet.

Art

1. Do page no.- 16, 25, 26, 31, 33, 34 (You have to do all the work in your Art book.)
2. Draw any one water animal in your sketch book and give thumb impressions using water colours on it.

Note: Each activity will be assessed and marks will be given. So complete your work neatly and beautifully.

Divinity

Revise the syllabus shared in the study group.

Worksheet - Complete the worksheets of English, Hindi, Maths, EVS and GK.

STAY HOME, STAY SAFE

Worksheet : 1

Subject: English

Class: I

Name: _____

Class & Sec. _____

Roll No. _____

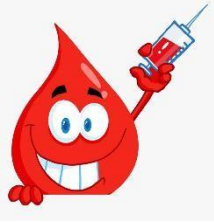
Date: _____

Q1. Write the colour of the following objects.















Q2. Look at the following pictures and write if the noun is a person, place or thing.

1.



2.




3.



4.



5.



6.



Q3. Write 4 lines on **My Favourite Fruit.**

1. _____

2. _____

3. _____

4. _____

Q4. Fill in the blanks with double letter words (oo, ll, ee)

1. B A _ _ O O N

2. L _ _ _ K

3. T R _ _

4. D O _ _

5. S H _ _ P

6. T A _ _ _

7. B _ _ _ K

8. C _ _ _ L

9. B E _ _

10. D _ _ _ P

Q5. Look at the following picture and answer the questions:

1. What is this place?

2. Who are playing?

3. Name one animal that you can see in the picture?

4. List down any 3 nouns that you can see in this picture.

1. _____

2. _____

3. _____

Q6. Answer the following questions. (Refer- Lesson : What Fun!)

Q1. What is missing in the picture?

Ans _____

Q2. Who has a box of crayons?

Ans _____

Q3. Where are the children?

Ans _____

Name: _____ Class & Sec. _____ Roll No. _____ Date: _____

Q1. Write a or an in front of each word.

Ans

1. _____ boot
2. _____ ear
3. _____ orange
4. _____ nose
5. _____ ice-cream
6. _____ fox
7. _____ balloon
8. _____ egg
9. _____ eagle
10. _____ bird

Q2. Write the plural form of each noun

a. The _____ (cat) are running.



b. Fill all these _____ (bottle).



c. Colour all the _____ (tree) green.



d. Read all the _____ (page).



e. Keep your _____ (book) clean.



f. Write the _____ (word) neatly.

g. Wash all the _____ (car).



h. Give me some _____ (pencil).



i. Fill in the _____ (blank)

j. There are ten _____ (bird).



Q3. Look at the following pictures . Fill in the blanks with words from the box.

Crying, playing, reading, sleeping , enjoying, eating, talking, walking , cooking , singing

1. Rita is _____ a book.



2. The baby is _____.



3. Rohan is _____.



4. The man is _____.



5. The children are _____.



6. Mother is _____.



7. The boy is _____.



8. Manu is _____.



9. The man is _____.



10. My father is _____.



Q4. Look at the picture given below and complete the sentences .



happy	reading	park	playing	jumping	pulling
-------	---------	------	---------	---------	---------

1. This is a scene of a _____.
2. The children are _____.
3. The girl is _____ a book.
4. One boy is _____ happily.
5. Another boy is _____ the cart.
6. Everybody is looking _____.

LITERATURE

Answer the following questions (Refer: Lesson: The Little Bird)

Q1. Where were the children?

Ans1. _____

Q2. How was the grass ?

Ans2. _____

Q3. Who came into the house ?

Ans3. _____

Q4. Who all were in the house ?

Ans4. _____

कार्य पत्रिका 1

विषय -- हिंदी

कक्षा - प्रथम

नाम _____ कक्षा वर्ग _____ दिनांक _____

प्रश्न 1: नीचे दिए खाली स्थान में इ व ई की मात्रा के शब्द लिख कर खाली स्थान भरो



चि या



ति त



बा श



धर



सान



न



ठाई



सी



मान

प्रश्न 2: चित्र मिलान करो

1 अखबार

2 छिलका

3 पहिया

4 महल

5 गाजर

6 हलवा

7 उपहार

8 आम



प्रश्न 3: खाली स्थान भरकर वाक्य पूरे करो :

राधा पढ़ ।



..... का शिकार मत कर ।



..... चला ।



..... इधर रख ।



राधा..... मत पकड़ ।



..... खाट पर रख ।



प्रश्न 4: सब्जियों के नाम लिखो:

1 _____

4 _____

2 _____

5 _____

3 _____

6 _____

प्रश्न 5: नीचे दिए वर्णों को जोड़ कर नए शब्द बनाओ:

ज + ल =	त + त + ल + त =
ब + स =	क + त + म =
घ + र =	छ + त + त + त =
फ + ल =	श + त + ज + त =
ज + रा =	ब + त + ज + त =
म + ट + र =	पि + ह + र + न =
ब + त + ख =	पि + ग + न =
ब + ट + न =	पि + स + या + र =
म + ह + ल =	पि + च + पि + ड + या =
क + म + ल =	पि + म + ला =
क + स + र + त =	म + छ + ल + ती =
श + ल + ग + म =	झ + ती + ल =
श + र + ब + त =	स + ती + ट + ती =
थ + र + म + स =	न + ती + ला =
अ + च + क + ने =	ख + ती + र =

कार्य पत्रिका 2

विषय -- हिंदी

कक्षा -- प्रथम

नाम _____ कक्षा वर्ग _____ दिनांक _____

प्रश्न 1: नीचे दिए चित्रों को देखकर नाम लिखो:



1 _____



2 _____



3 _____



4 _____



5 _____



6 _____



7 _____



8 _____



9 _____

प्रश्न2: शब्द लिख कर वाक्य पूरे करो



सलमा

खा।

नगमा

पहन।



बरखा

पकड़।

रचना

मत बजा।



राम

जला



रमन अपना

पकड़

प्रश्न3: फलों के नाम लिखो

1 _____

4 _____

2 _____

5 _____

3 _____

6 _____

प्रश्न 4: चित्रों का मिलान करो:



टिकट



सितार



दिमाग



किशमिश



मकड़ी



कली



चाबी



दिन



बकरी



प्रश्न 5 : आ ,इ, ई की सही मात्रा लगाओ

आरति _____	अम _____	इमलि _____
कीशमिश _____	अश्रम _____	नदि _____
ततल _____	चन _____	वीमन _____
गटार _____	किसन _____	असन _____
मछलि _____	गीलहरी _____	मठाइ _____
खिरा _____	किताब _____	चिडीया _____
हीरन _____	हथ _____	गीलस _____

प्रश्न 6: नीचे दिए शब्दों से वाक्य बनाओ:

पपीता -----

माला -----

गिटार -----

मकड़ी -----

मिठाई -----

प्रश्न 7: नीचे दिए शब्दों सही मात्रा में लिखें

लाल, किसान , बिल , मछली, रात, बकरी, दिल, आफत, लिहाफ दादी, टिकट, आप ,
लड़की, बरखा, गिटार , पानी ,

आ -----

इ -----

ई -----

Assignment: 1

Subject: EVS


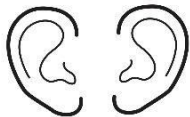
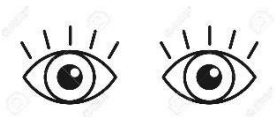
Class: I

Name: _____ Class & Sec. _____ Roll No. _____ Date: _____

Q1. Fill in the blanks

1. Our _____ helps us to smell.
2. Our eyes help us to _____.
3. Our _____ help us to hear.
4. Our _____ help us to feel.

Q2. Match



Q3. Give two examples each.

a. Food we get from plants

_____, _____

b. Food we get from animals.

_____, _____

c. Food that help us to grow

_____, _____

d. Food that give us energy.

_____, _____

e. Food that keep us healthy.

_____, _____

Q1. Write the names of 3 meals in a day.

Ans.1. _____


2. _____

3. _____


Q2. Write three good eating habits.

Ans 2. _____

A. Draw your favourite food items



B. Draw two sense organs.



Name: _____ Class & Sec. _____ Roll No. _____ Date: _____

Q1. Write true or false

- a. We get cotton from animals. _____
- b. We wear woollen clothes in summer. _____
- c. We use umbrella during rain. _____
- d. We should drink 2 glasses of water every day. _____
- e. Children wear uniform in school. _____
- f. Cotton clothes keep us cool in summer. _____
- g. Winter clothes keep us warm in winter. _____
- h. Lion gives us wool. _____
- i. Sweaters are used in rainy season. _____
- j. We drink cold drinks during winter season. _____
- k. We should wear dirty clothes. _____
- l. Clothes make us look smart. _____

Q2. Give two examples each for the following

- a. Clothes worn in summer

Ans _____, _____

b. Clothes worn in winter.

Ans. _____, _____

c. Things used during rainy season.

Ans. _____, _____

d. People who wear uniform.

Ans. _____, _____

Q3. Fill in the blanks.

1. _____ clothes keep us cool in summer.

2. _____ give us wool.

3. _____ clothes make us look smart.

4. Wash your _____ before and after eating.

5. Do not _____ food.

B. Answer the following questions:


Q1. Why do we wear clothes?

Ans.1 _____


Q2. What do students wear in school?

Ans2. _____

Draw two clothes you wear in summer season.

A large, empty rectangular box with a thin black border, intended for a drawing of two clothes worn in the summer season.

Draw two things you use during rainy season.

A large, empty rectangular box with a thin black border, intended for a drawing of two things used during the rainy season.

Worksheets: 1

Subject: Mathematics

Class: 1

Name _____

Class & Sec _____

Date _____

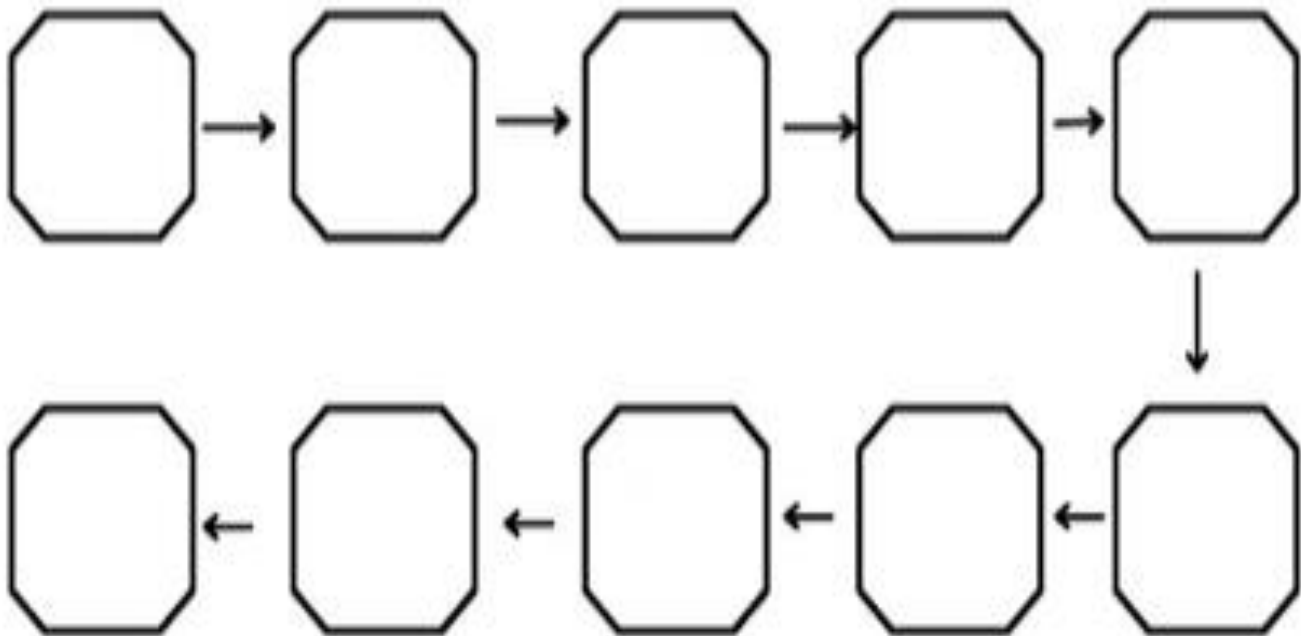
Q1: Counting backward:

86 8061 5518 1283 7795 8940 3430 24

Q2: Write these numbers in correct order:

23 27 29 30 25

22 28 21 24 26



Q3: Add:

$$\begin{array}{r} 4 \\ + 2 \\ \hline \end{array}$$

$$\begin{array}{r} 3 \\ + 1 \\ \hline \end{array}$$

$$\begin{array}{r} 5 \\ + 2 \\ \hline \end{array}$$

$$\begin{array}{r} 3 \\ + 3 \\ \hline \end{array}$$

$$\begin{array}{r} 7 \\ + 1 \\ \hline \end{array}$$

$$\begin{array}{r} 6 \\ + 2 \\ \hline \end{array}$$

$$\begin{array}{r} 4 \\ + 3 \\ \hline \end{array}$$

$$\begin{array}{r} 8 \\ + 1 \\ \hline \end{array}$$

$$\begin{array}{r} 4 \\ + 4 \\ \hline \end{array}$$

$$\begin{array}{r} 5 \\ + 4 \\ \hline \end{array}$$

$$\begin{array}{r} 3 \\ + 2 \\ \hline \end{array}$$

$$\begin{array}{r} 7 \\ + 2 \\ \hline \end{array}$$

$$\begin{array}{r} 5 \\ + 3 \\ \hline \end{array}$$

$$\begin{array}{r} 9 \\ + 0 \\ \hline \end{array}$$

$$\begin{array}{r} 8 \\ + 1 \\ \hline \end{array}$$

$$\begin{array}{r} 6 \\ + 3 \\ \hline \end{array}$$

Q 4: Find missing letters and write

1- O N E

2- T _ _

3- T _ _ _ E

4- F _ _ R

5- _ _ _ E

6- _ _ _

7- S _ _ _ N

8- E _ _ _ T

9- N _ _ _

10- _ _ _

11- E _ _ _ _ N

12- TW _ _ _ _

13- T _ _ _ TEEN

14- FOUR _ _ _ _

15- FIF _ _ _ _

16- SIX _ _ _ _

17- SE _ _ _ _ _ EN

18- _ _ _ _ _ EEN

19- _ _ _ _ TEEN

20- TW _ _ _ _

Q5: Compare the numbers and put the sign <, > or =

1) 58 68

6) 78 95

2) 95 75

7) 96 65

3) 25 95

8) 65 65

4) 82 82

9) 29 32

5) 95 78

10) 91 64

Q6: Addition 2 digit numbers

$$\begin{array}{r} 87 \\ +11 \\ \hline \end{array}$$

$$\begin{array}{r} 45 \\ +22 \\ \hline \end{array}$$

$$\begin{array}{r} 26 \\ +13 \\ \hline \end{array}$$

$$\begin{array}{r} 56 \\ +31 \\ \hline \end{array}$$

$$\begin{array}{r} 70 \\ +22 \\ \hline \end{array}$$

$$\begin{array}{r} 33 \\ +23 \\ \hline \end{array}$$

$$\begin{array}{r} 17 \\ +50 \\ \hline \end{array}$$

$$\begin{array}{r} 63 \\ +22 \\ \hline \end{array}$$

$$\begin{array}{r} 45 \\ +32 \\ \hline \end{array}$$

Worksheets: 2

Subject: Mathematics

Class: I

Name _____

Class & Sec _____

Date _____

Q1: Circle the correct spelling for each numeral

19-	ninteen	nineteen	ninty
20-	twenty	twnety	twonty
30-	threety	thrity	thirty
40-	fourty	forty	fotry
50-	fivety	fiftey	fifty
11-	eleven	oneone	elaven
12-	twolve	one two	twelve
13-	onethree	threeteen	thirteen

Q2: Counting backward 100-50:

[illegible]

Q3: Match the column A with B

A

B

17

Eleven

8

Nine

11

Eight

2

Fourteen

16

Seventeen

9

Twenty

14

Five

4

Sixteen

20

Four

5

Two

Q4:

Circle the bigger numbers

- a) 49 48 b) 64 87 c) 55 0
d) 7 31 e) 61 99 f) 32 20
g) 43 42 h) 9 1 i) 49 50

Circle the smaller numbers

- j) 29 21 k) 52 66 l) 64 63
m) 47 58 n) 60 3 r) 25 30
o) 2 8 p) 29 30 q) 2 12

Q5:

Circle the correct number for each word.

eight	5	13	8
sixteen	16	6	19
fourteen	14	24	4
twenty	2	12	20
ten	9	10	2
three	3	6	9
thirteen	16	13	4
nineteen	9	16	19
eleven	11	12	1
twelve	12	11	1

Q6: put the sign <, > or =

$66 \square 44$

$22 \square 77$

$33 \square 55$

$40 \square 20$

$88 \square 88$

$77 \square 99$

$70 \square 90$

$44 \square 11$

$99 \square 66$

$100 \square 10$

General Knowledge Worksheet

Class 1

Q1. How many days are there in a week?

Ans. 7 Days (Monday, Tuesday, Wednesday, Thursday, Friday, Saturday and Sunday)

Q2. How many months are there in a year?

Ans. 12 months (Jan to Dec)

Q3. Name two fruits which have one seed only.

Ans. Mango and cherry

Q4. Who is the Prime Minister of India?

Ans. Mr. Narendra Damodar Das Modi

Q5. How many colours in Indian Flag?

Ans. India's Flag is Tricolour. (Saffron, White and Green)

Q6. What is the blue thing in the center of our flag?

Ans. There is a blue wheel on the center. It is called the Ashoka Chakra.

Q7. What do you call people who live in India?

Ans. Indians

Q8. What is the name of your school?

Ans. Guru Tegh Bahadur 3rd Centenary Public School

Q11. Name the planet where you live.

Ans. Earth

Q12. Name two weekend

Ans. Saturday and Sunday

Q13. What comes before Wednesday?

Ans. Tuesday

Q14. What is your father's name and his mobile number?

Q15. What is your mother's name and her mobile number?